

SSC SUMMATIVE ASSESSMENT -1 JAN- 2022
SOCILA STUDIES
ENGLISH MEDIUM

CLASS: X

TIME : 3:15 Hours

MAX MARKS : 100

Instructions :

1. 15 minutes of time is allotted for reading the question paper in Addition to 3.00 hours for writing the answers.
2. All the answers should be written in the separate answer booklet.
3. There are four sections in the question paper.
4. There is internal choice in Section IV.
5. In the question No. 33, Both A & B (India map and world map) should be answered separately.

SECTION-1

12 × 1 = 12 M

Note: 1. Answer all the questions.

2. Each question carries 1 mark.

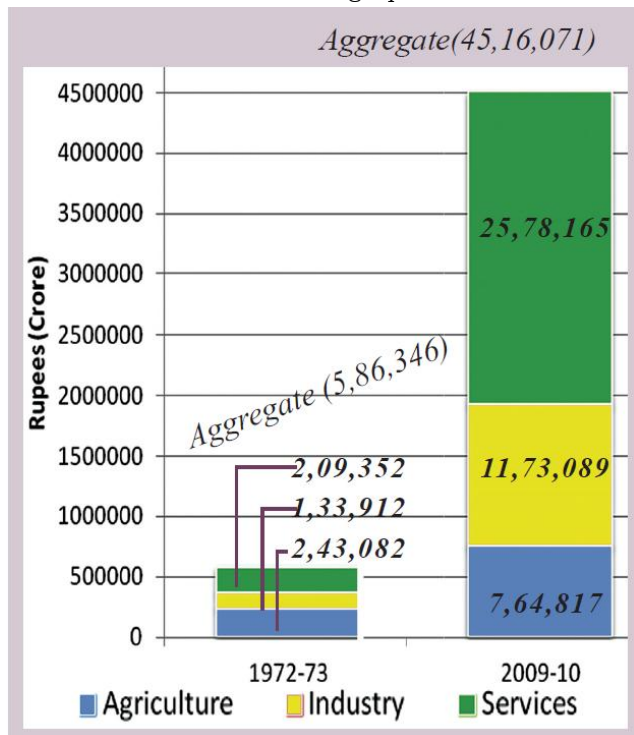
1. The Shivaliks are called by different names in different regions:
 - a. Jammu hills in Jammu region
 - b. Mishmi hills in Arunachal Pradesh
 - c. Cachar hills in -----?
2. Which Coast is different from the following:
 - a. Konkan Coast
 - b. Canara Coast
 - c. Coramandel Coat
3. List of activities is given below identify the activity belongs to Primary sector:
 - a. Banking and Call centre employee
 - b. Worker in match factory
 - c. Mining, Poultry and Nursery
4. Observe the table and answer the following questions given below:

NAME OF THE RIVER	BIRTH PLACE
The Godavari	Nasik near Trayambak
The Krishna	Mahabaleswaram
The Mahanadi	Sihawa in Chattisgarh
The Narmada	Near Amarkantak

Name the largest Peninsular river flowing towards East.

5. Arrange the following capitals from west to East according their location:
Kolkata, GandhiNagar, Jharkhand and Bhopal.

6. Answer the following questions based on the graph given below:



THE GRAPH IN PAGE NO. 30 IN TEXT BOOK

a. Which was the largest producing sector in 2009–2010?

7. With the first world war several empires ended

- The Austro-Hungarian Empire- Austria
- Russian Empire- Russia
- German Empire- Germany
- The Ottoman Empire-----?

8. Based on the relationship between the information in the first para, complete the second para.

- Second largest populated country-India
- Third largest populated country- ?

9. Name the two organizations wished to unite all the Hindus for reforms in their social life.

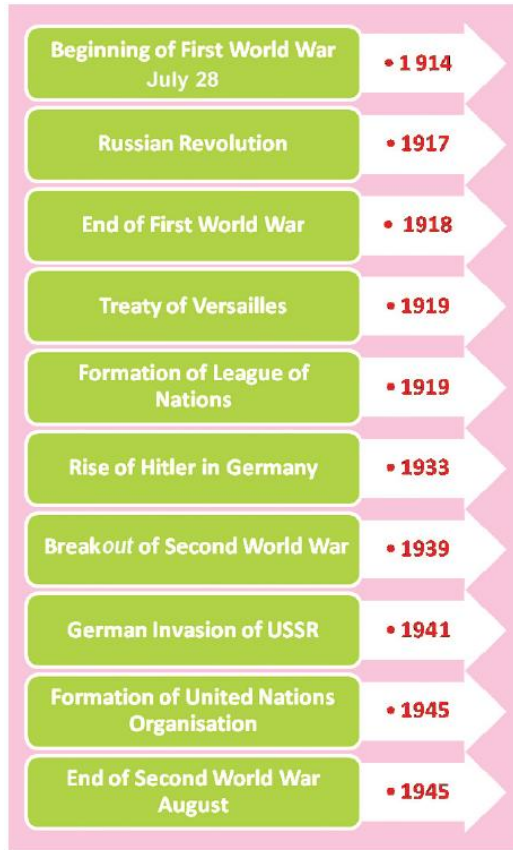
10. Identify the person who described 20th century 'The age of Extreme'



THE PICTURE IN PAGE NO 176 IN TEXT BOOK

Write few lines about him?

11. Study the timeline chart and answer the following question:



THE TIME LINE CHART PAGE NO 179 IN TEXT BOOK

- Who was responsible for revolution in Russia in 1917?
 - Second World War ended with the surrender of this country in 1945.
12. Write two slogans to prevent wars?

SECTION-11

8×2=16

Note: 1. Answer all the questions. 2. Each question carries 2 marks.

- Plateau regions in India don't support agriculture as much as the Plains? What are the reasons for this?
- What is the relationship between women's work outside their homes and Gender bias?
- Suggest any two measures to control the Global warming Climate changes?
- Answer the following questions based on the Map:



THE MAP IN PAGE NO 60 IN THE TEXT BOOK

- a. Name any two North and South ward flowing tributaries of R. Ganga.
 - b. In Tibet Brahmaputra river known as?
17. Arrange the following peaks as per their height?
- a. Aroyakonda
 - b. Annaimudi
 - c. Dodabetta
18. What were the two secret alliances formed during world war one?
19. Britishers followed the 'Divided and Rule' policy more vigorously. Explain the statement?
20. "Winners also get ravaged in wars" - comment.

SECTION-111

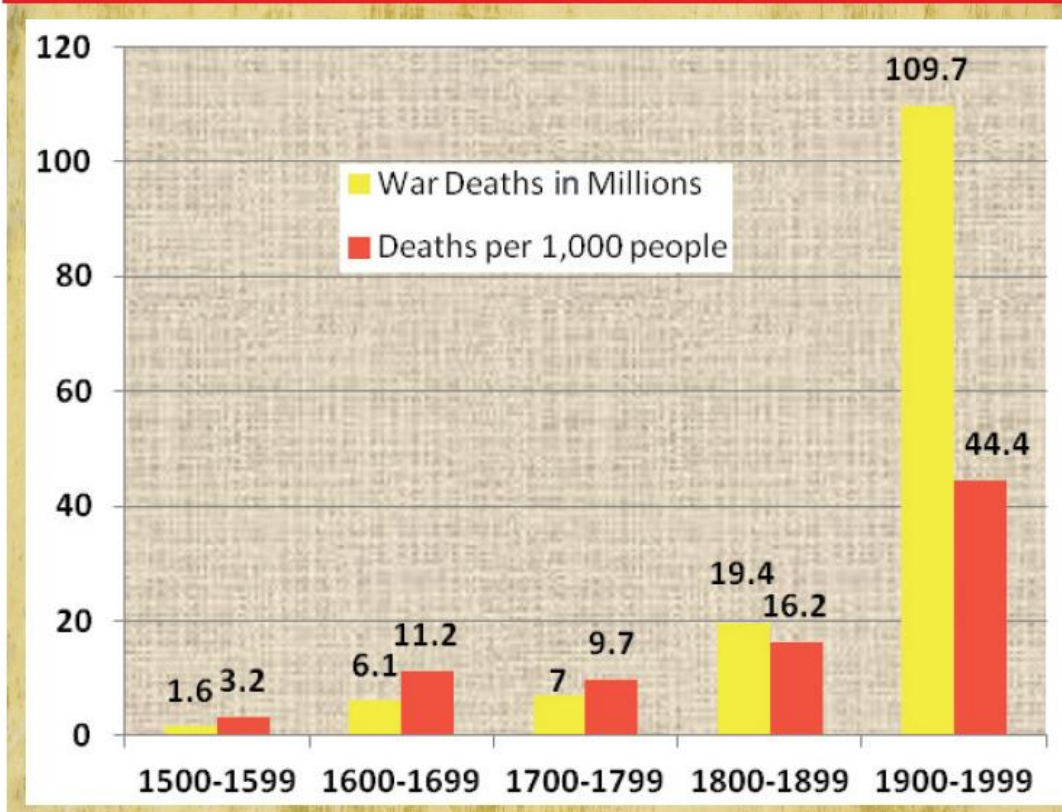
8×4=32

Note: 1. Answer all the questions.

2. Each question carries 4 marks.

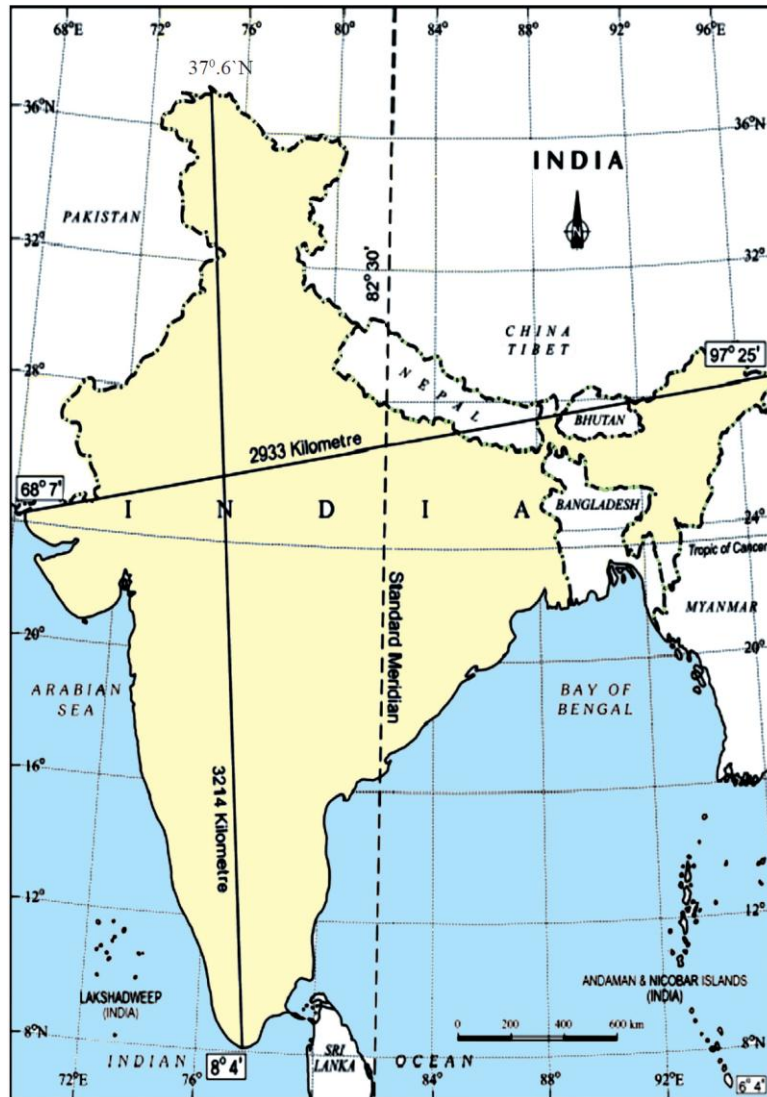
21. What is the influence of Himalayas in Indian Agriculture?
22. Which qualities of Hitler do you like most? What promises he made to the people?
23. Answer the following questions based on the graph given below:

Graph 1 : War related deaths 1500 - 1999



THE GRAPH PAGE NO 178 IN TEXT BOOK

- What was the number of war deaths in 16th century?
 - In which century was the number of war deaths low?
 - Why was number of war deaths high during 1900-1999?
 - Estimate consequences if third world war taken place.
24. Suggest some measures to minimize the influence of Global Warming?
25. Write about 'Hiware Bazar'? What are the bans or bunds implemented in Hiware Bazar under AGY?
26. Answer the following questions based on the map given below:



THE MAP PAGE NO 3 IN TEXT BOOK

- a. Name the line passes through the centre of India?
- b. The place situated in the three seas.
- c. Distance from North to South of India?
- d. What is Indira Point?
27. How did partition effect the lives of ordinary people?
28. Appreciate the role played by Sardar Vallabai Patel in Integration of princely states in Indian union?

SECTION-IV

5×8=40

Note: 1. Answer all the questions. 2. Each question carries 8 marks.
3. There is internal choice in Section IV.4. In the question No. 33, Both A & B (India map and world map) should be answered separately

29. How are the Eastern Coastal plains and Western Coastal plains similar or different?

(or)

Compare the difference between Eastern Ghats and Western Ghats?

30. Write about 'schooling revolution' in Himachal Pradesh?
(or)

What do you understand by under employment? Explain with an example each from the urban and rural areas?

31. How are human activities contributing to Global Warming?
(or)

Describe the India's climate controls?

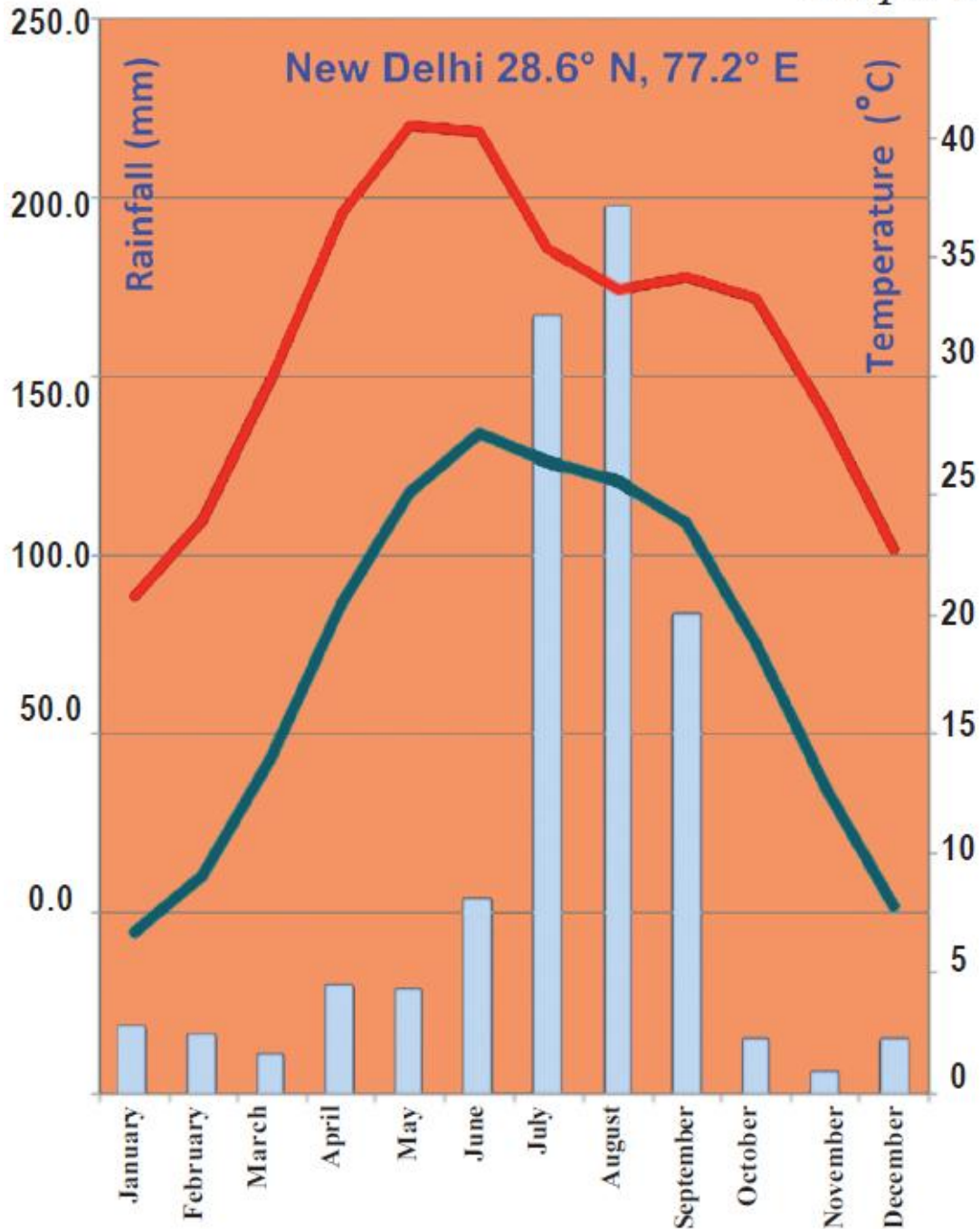
32. Study the timeline chart given below and answer the following questions:



THE GRAPH PAGE NO 196 IN TEXT BOOK

- where was the weimar republic proclaim?
 - What was the beginning of Second World War?
 - What was Auschwitz?
 - When and who got the final victory in Second World War?
- (or)

Observe the following climograph and answer the following question?



- Which month received the highest rain fall?
 - Which months experience highest and lowest temperature?
 - Why is the maximum amount of rain fall between June and October?
 - Why is the temperature high between March and May?
33. Mark the following in the outline map of **India**:
- The Indian Islands which are famous for great variety of Flora and Fauna.
 - The strait that separate SriLanka and India.
 - The capital city of India.
 - The largest Peninsular river.
 - Chotanagpur plateau.

- f. Konkan Coast.
- g. The river that flows in the Thar Desert.
- h. The state that gets rainfall first from South-West monsoon.

(or)

Mark the following in the outline map of the **World**:

- a. Head quarter of UNO
- b. Capital city of Italy.
- c. Portugal
- d. The land of Rising Sun.
- e. Black sea
- f. The country in which Bolshevik revolution broke out.
- g. The sea around Italy.
- h. Angola.

//All the best//