

# PAPER - 1: MAP POINTING

1. The north most latitude in degrees
2. The south most latitude in degrees
3. The east most longitude in degrees
4. The west most longitude in degrees
5. Indian Standard Meridian
6. The city which is passes Indian standard meridian
7. The State where sunrise first
8. The State where sunrise last
9. The prime latitude which is passes through India
10. Gujarat
11. Rajasthan
12. Madhya Pradesh
13. Chhattisgarh
14. Jharkhand
15. West Bengal
16. Tripura
17. Mizoram
18. Uttarapradesh
19. Madhya Pradesh
20. Chhattisgarh
21. Odisha
22. Andhra Pradesh
23. The Eastern boundary of India
24. The Western boundary of India
25. The northern boundary of India
26. The southern boundary of India
27. The south most point of India main land
28. The south most point of India
29. The north most point of India
30. The East most point of India
31. The West most point of India
32. Jammu & Kashmir
33. Ladak
34. National Capital Territorial ( New Delhi)
35. Chandigarh
36. Pondicherry
37. Daiu Daman
38. Dadranagar Haweli
39. The Islands formed due to volcanic eruption
40. Coral Islands
41. Pakistan
42. Afghanistan
43. China
44. Nepal
45. Bhutan
46. Myanmar
47. Bangladesh
48. The nearest country of India in water
49. The nearest country to Lakshadweep
50. The strait separating Srilanka from India
51. The gulf between Srilanka and India
52. Himalayas
53. Indo- Gangetic plains
54. Peninsular plateau
55. Thar desert
56. Islands
57. Coastal
58. Himadri– The North most range of Himalayas
59. Himachal
60. Siwaliks–The south most range of Himalayas
61. The eastern part of Himalayas
62. The Highest peak in Himalayas
63. The Highest peak in India
64. The mountain range where K2 peak situated
65. The Zaskar range
66. Kanchenjunga
67. Nanga Parbat



68. Kulu valley
69. Kangra Valley
70. Mussori
71. Raniket
72. Nainital
73. Capital city of Himachalpradesh
74. Pirpanjal Range
75. Mahabharata Range
76. Mishmi hills
77. Cachar
78. Dehradun
79. Patli Dun
80. Kotli Dun
81. The Patkai Bum
82. Naga hills
83. Manipuri hills
84. The Jaintia
85. The Kasi hills
86. Mizo Hills
87. The Indian Plateau
88. The North division of the Peninsular Plateau
89. The South division of the Peninsular Plateau
90. The Plateau Which is rich in minerals
91. The mountain range on the North of Narmada
92. The Northern boundary of Deccan Plateau
93. The mountain range on the south of Narmada
94. The Eastern boundary of Deccan Plateau
95. The Western boundary of Deccan Plateau
96. The Southern boundary of Deccan Plateau
97. The mountain range which is joint Eastern and Western Ghats
98. The Highest peak in Nilagiri Hills
99. The Highest peak in Western Ghats
100. The highest peak in Eastern Ghats
101. The highest peak in South India
102. Ooty
103. Kodaikenal
104. The place situated on the seas
105. The Cardamom Hills
106. Palani hills
107. Annaimalai hills
108. Rajamahal hills
109. Nallamalas
110. Velikondas
111. Palakondas
112. Seshachala hills
113. The Great desert in India
114. The mountain range which is caused for Forming Thar Desert
115. The River flowing in Thar desert
116. Konkan Coast
117. Canara Coast
118. Malabar Coast
119. Coramandal Coast
120. Sircar Coast
121. Utkal Coast
122. Vanga Coast
123. The lake in Odissa
124. The fresh water Lake in Andhrapradesh
125. The salt water Lake in Andhrapradesh
126. The state where Education revolution Blowing
127. Punjab
128. Bihar
129. Andhrapradesh
130. Kerala
131. Maharashtra
132. Uttarapradesh
133. Uttarakhand



134. Madhya Pradesh
135. Telangana
136. Manipur
137. West Bengal
138. Karnataka
139. Odisha
140. Indus River
141. Sutlej
142. Jhelum
143. Chenab
144. Ravi
145. Beas
146. Luni
147. Sabarmati
148. Mahi river
149. Narmada
150. Sardhar sarovar dam
151. Tapathi
152. Kaveri
153. Penna
154. The second longest Peninsular River
155. Tungabhadra
156. The longest Peninsular River
157. Mahanadi
158. Ganges
159. Brahmaputra
160. Leh
161. Jaipur
162. Capital city of Tamil Nadu
163. The capital city of Andhra Pradesh
164. Vizianagaram
165. The highest populated city in India
166. The capital city of Karnataka
167. The capital city of West Bengal
168. The highest populated city in Andhra Pradesh



169. Ahmadabad
170. The city where Indira Gandhi International Airport is situated
171. The city where Rajiv Gandhi International Airport is situated
172. Rampur
173. Hiware Bazar
174. Barahampur
175. Jalasindh

**Note:**

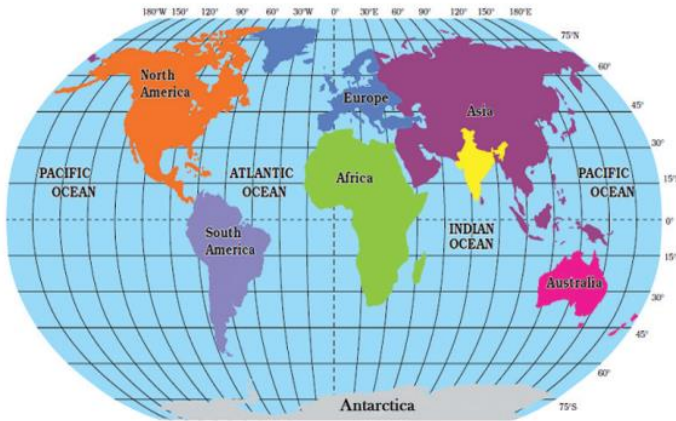
- This material for **Practice** only
- Please Use Our **DCEB Study Material, Vizianagaram** for Key



**APSSTF**  
**Vizianagaram**

# PAPER -1: MAP READING

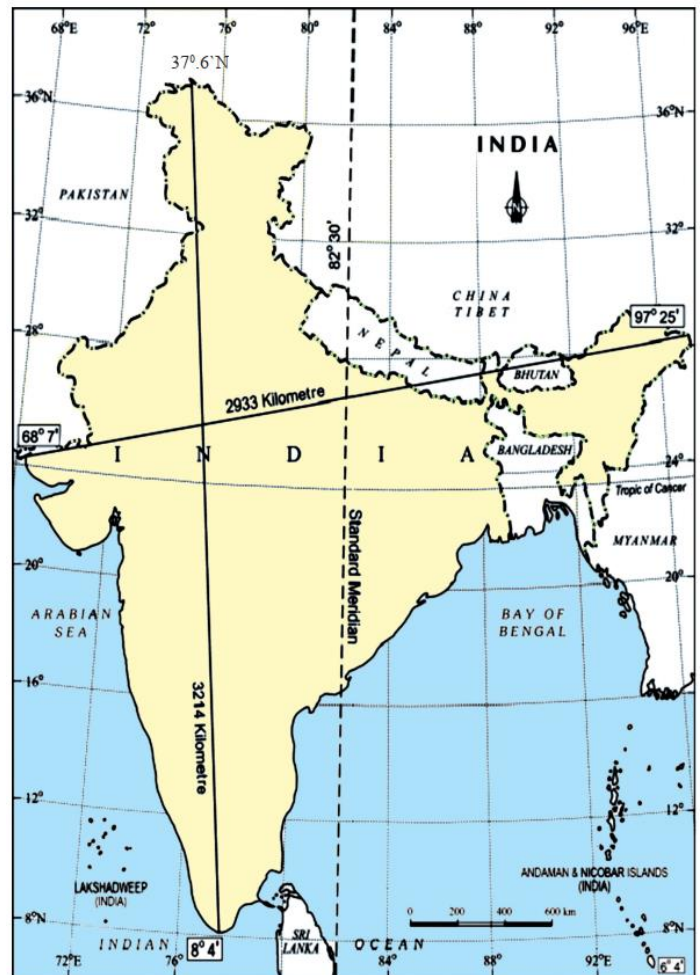
1. Read the following map and answer the below questions.



- i. India lies in which hemisphere According to Longitudes?
- ii. India lies in which hemisphere According to Latitudes?

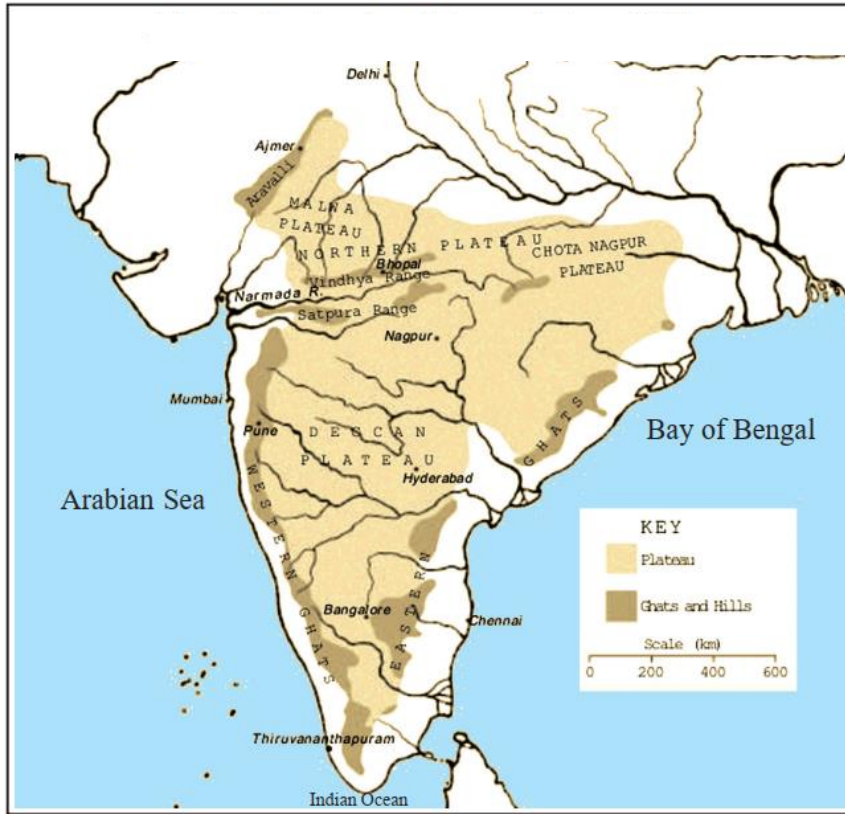
2. Read the following map and answer the below questions.

- i. Write any two boundary countries of India?
- ii. The South most latitude of India?
- iii. The East most longitude of India?
- iv. The West most longitude of India?
- v. Which is Indian Standard Meridian?
- vi. The length between east most point to west most point?





3. Read the following map and answer the below questions.



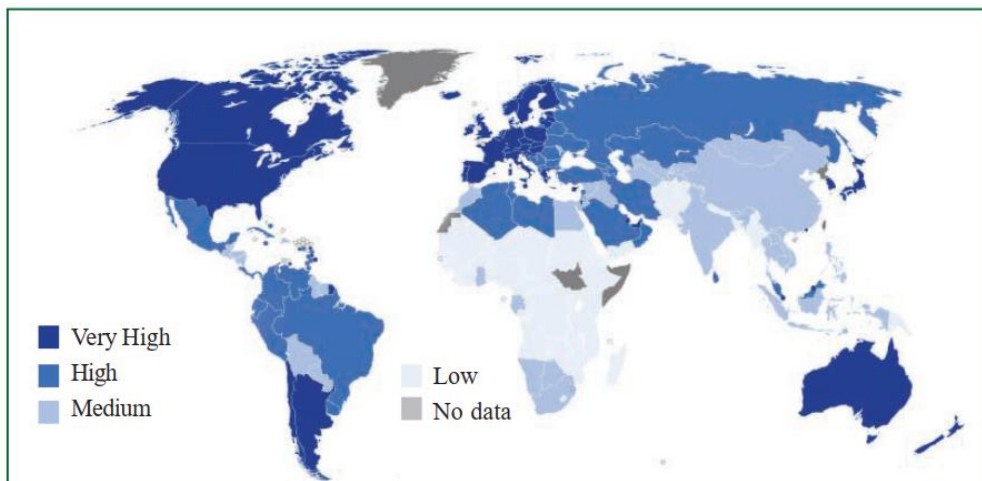
i. Which river flows through rift valley?

ii. Which plateau rich in minerals?

iii. The southern boundary of Malwa plateau?

iv. The mountain range which is situated in the North – West part of

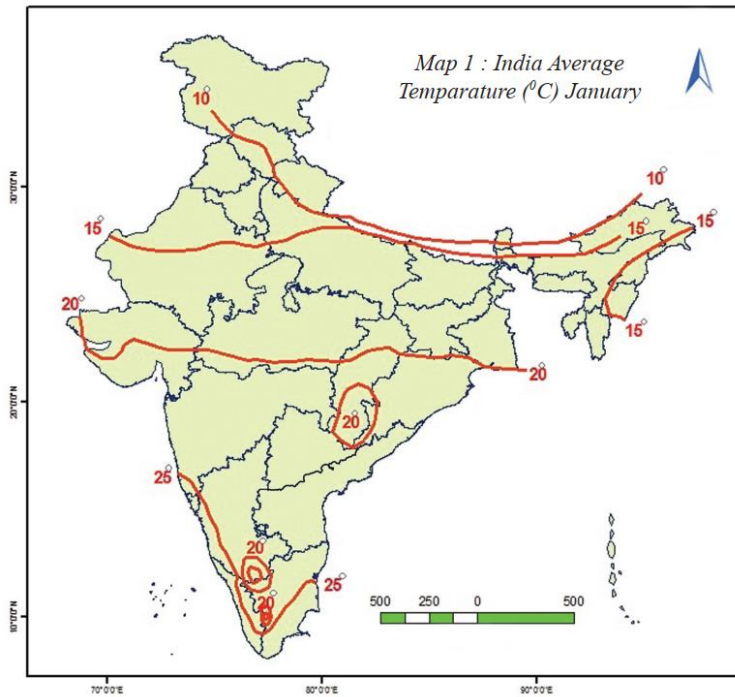
4. Read the following map and answer the below questions.



Map 1 : World map showing HD Index. Identify various patterns in different continents.

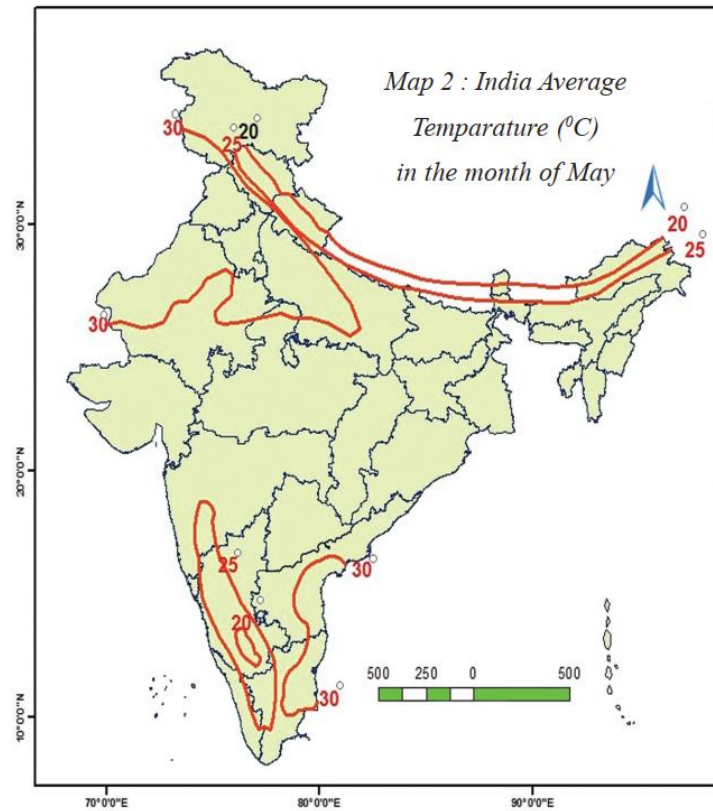
- i. Name any two countries with very high HDI?
- ii. Name any two countries with medium HDI?
- iii. India is in which group of HDI?

5. Read the following map and answer the below questions.



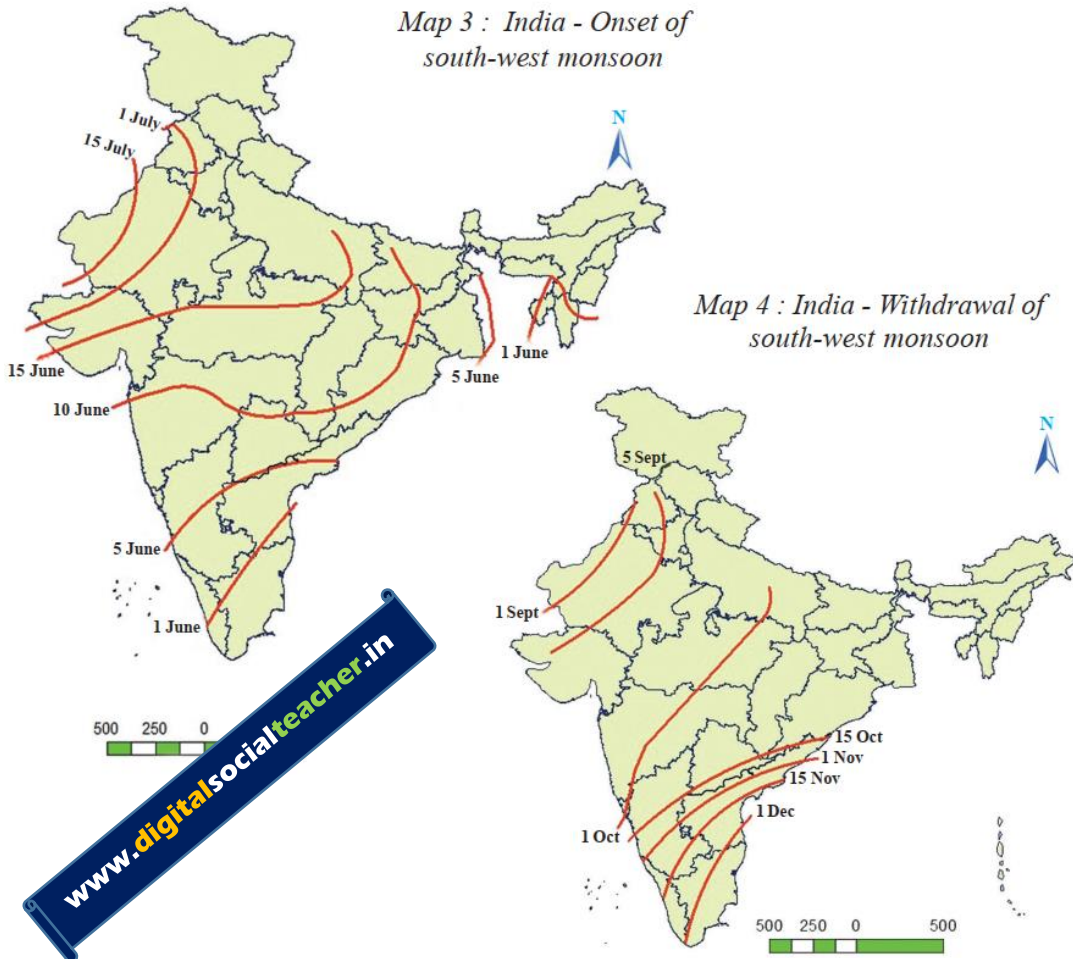
- i. Name any two which were recorded 10 degrees c.?
- ii. Why 20 degrees Cen. circles formed near 25 degrees Cen. temperature areas?

6. Read the following map and answer the below questions.



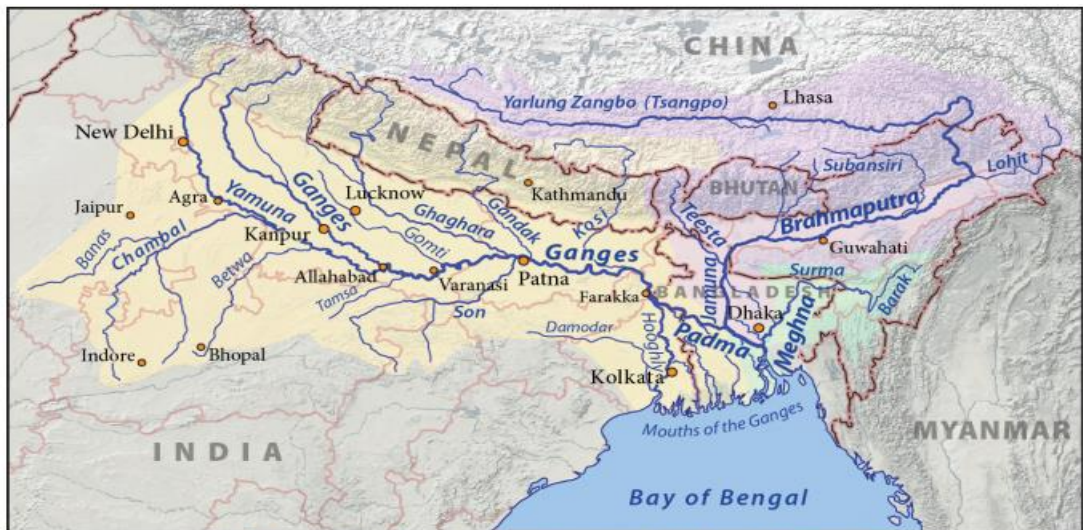
- i. Name any two which were recorded 30 degrees c.?
- ii. Why in some states have low temperatures even in summer?

7. Read the following map and answer the below questions.



- i. South-West monsoons enters first in which state?
- ii. When, South-West monsoon reaches Rajasthan?

8. Read the following map and answer the below questions.



*Map 2 : Ganga joining with Brahmaputra*

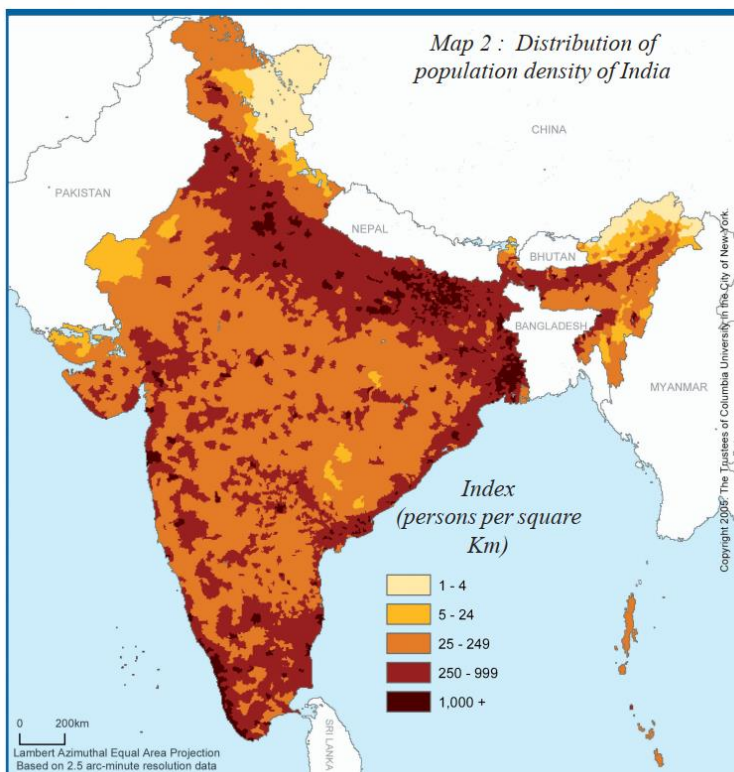


- i. Which are the North tributaries of Ganges?
- ii. Which are the South tributaries of Ganges?
- iii. Which city situated on the bank of Yamuna?
- iv. Lucknow is situated on the banka of which river?

9. The below map show the area of countries on the basis of population it would look like this. How is it different from other world maps? Discuss.



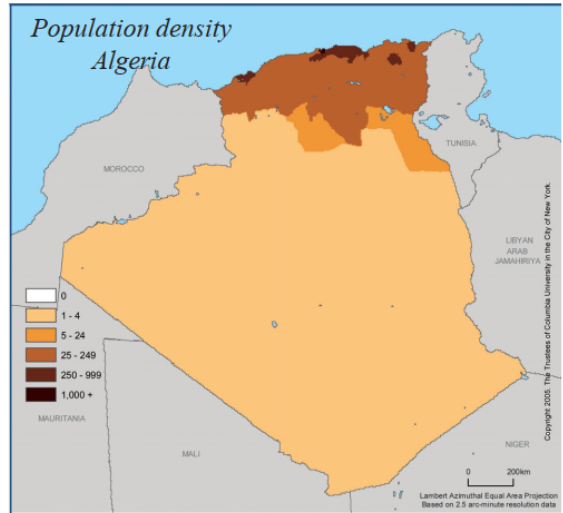
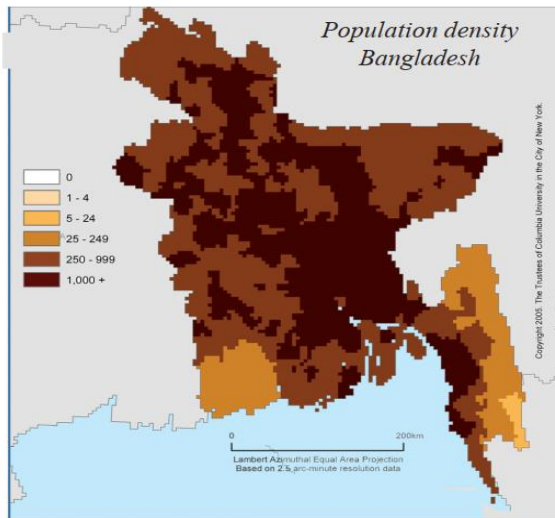
10. Read the following map and answer the below questions.



- i. Find out if there is any relationship between relief features of India and population density.
- ii. Identify major urban centers across the country. How do you explain the high population density in the cities?

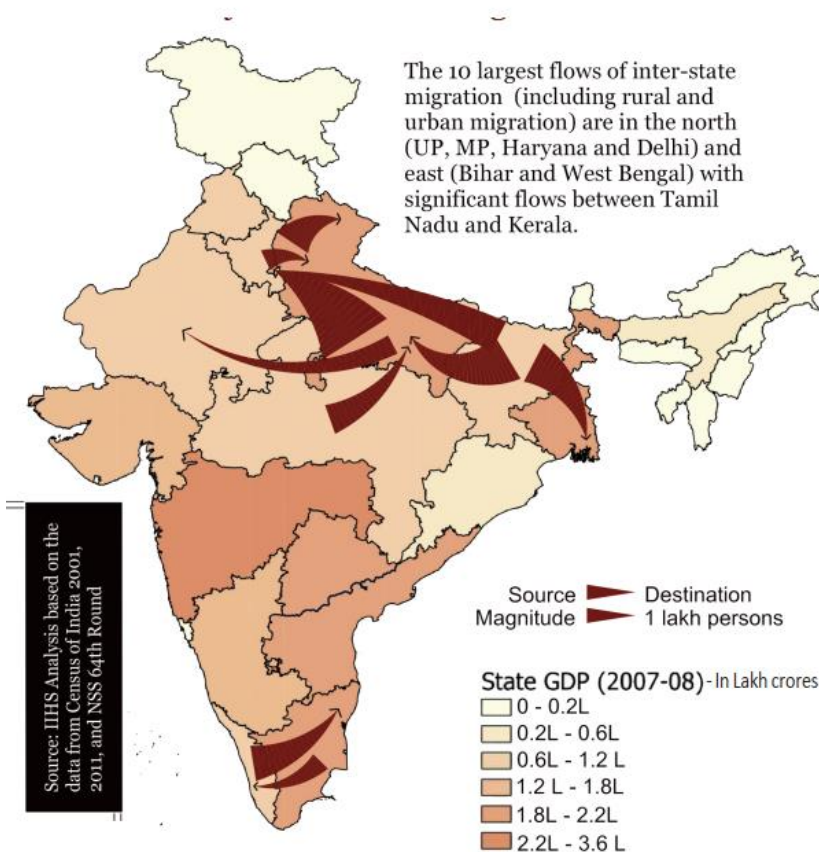


11. Read the following maps and comment on it.



12. Read the following map and comment on it.

Map 3 : Estimated Major Inter - State Migration Streams : 2001- 2011



www.digitalsocialteacher.in

## PAPER -2: MAP POINTING

1. Pacific ocean
2. Indian ocean
3. Atlantic ocean
4. Arctic ocean
5. Antarctic ocean
6. Asia
7. Black continent (Africa)
8. North America
9. South America
10. Antarctica
11. Europe
12. Australia
13. The city where headquarter of UNO situated &

The city where headquarter of UNICEF situated

14. Capital city of USA
15. The city where headquarter of League of Nations situated & The city where headquarter of WTO situated & The city where headquarter of WHO situated
16. The city where headquarter of International court of justice situated
17. Capital city of Russia
18. Capital city of Britain
19. Capital city of India
20. The city where march revolution took place
21. The city where may 4<sup>th</sup> revolution took place
22. The country where May 4<sup>th</sup> revolution occurred

23. The country where October revolution occurred
24. The leader of Triple entente
25. The leader of Triple Alliance
26. Capital city of Japan
27. The strait separating North America from Asia
28. The Canal joint Atlantic ocean with Pacific ocean
29. The Canal joint Meditarian sea with Red sea
30. Meditarian sea
31. Red sea
32. Black sea
33. Caspian sea
34. North sea
35. White sea
36. Baltic sea
37. Adriatic sea
38. Zebraalter strait
39. English channel
40. Bay of Hudson
41. Arabian sea
42. Bay of Bengal
43. Palk strait
44. Gulf of Manner
45. USA(America)
46. Canada
47. Mexico
48. Brazil
49. Chile
50. Peru
51. Argentina
52. Cuba
53. West indies
54. Venezuela
55. Colombia

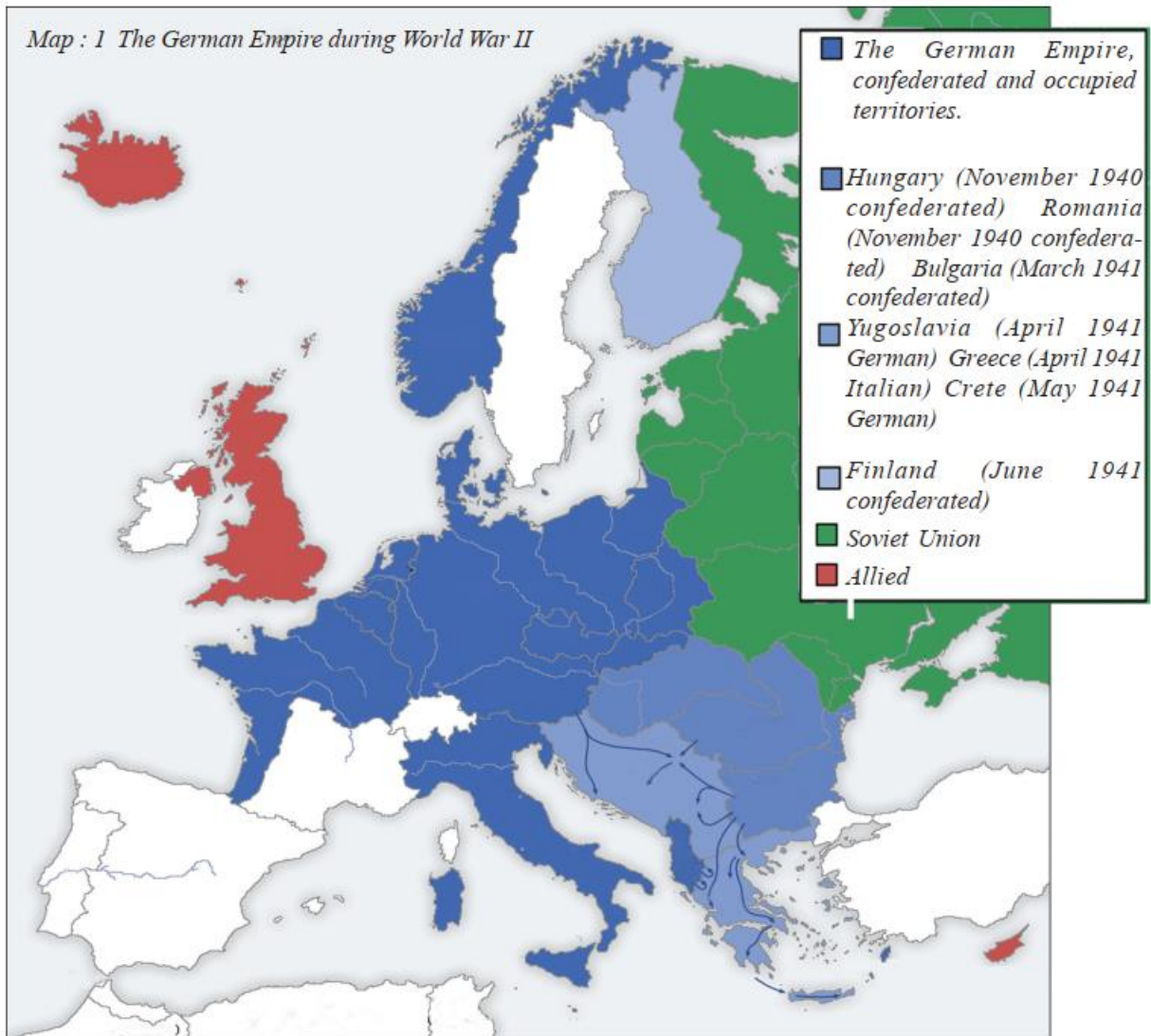


56. Greenland
57. Australia
58. Newzland
59. The country which ruled Angola
60. Spain
61. France
62. Austria
63. Serbia
64. The county which ruled Congo
65. Italy
66. Capital city of Italy
67. Poland
68. Turkey
69. Ireland
70. Yugoslavia
71. Egypt
72. Libya
73. Algeria
74. Morocco
75. Tunisia
76. Sudan
77. The independent country in Africa
78. Kenya
79. Tanzania
80. South Africa
81. Zimbabwe
82. Zambia
83. Madagascar
84. Namibia
85. Angola
86. Nigeria
87. Congo
88. Sahara Desert
89. India
90. Japan
91. Srilanka
92. Bangladesh
93. Pakistan
94. Nepal
95. Separate state of Jews ( Israel)
96. Palestine
97. Iran
98. Iraq
99. The only French colony in Asia (Vietnam)
100. The country where Bandung conference held ( Indonesia)
101. Malaysia
102. Singapore
103. South Korea
104. North Korea



## PAPER -2: MAP READING

1. Read the following Europe map and answer the below questions.



a) Name any two countries which were in German empire during World War II?

b) Which were in allied group during World War II?



2. Read the following map and answer the below questions.



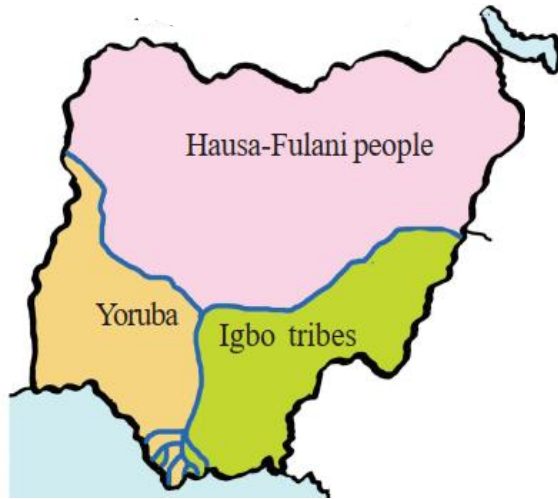
- a) Name any countries which were not under control of Japan?
- b) Name any countries which were under control of Japan?

3. Read the following map and answer the below questions.



- a) This map shows which country?
- b) This country was the colony of which country?
- c) This country located in which continent?

4. Read the following map and answer the below questions.



- a) This map shows which country?
- b) Which Tribal people live in South-West Nigeria?
- c) Which Tribal people live in North Nigeria?

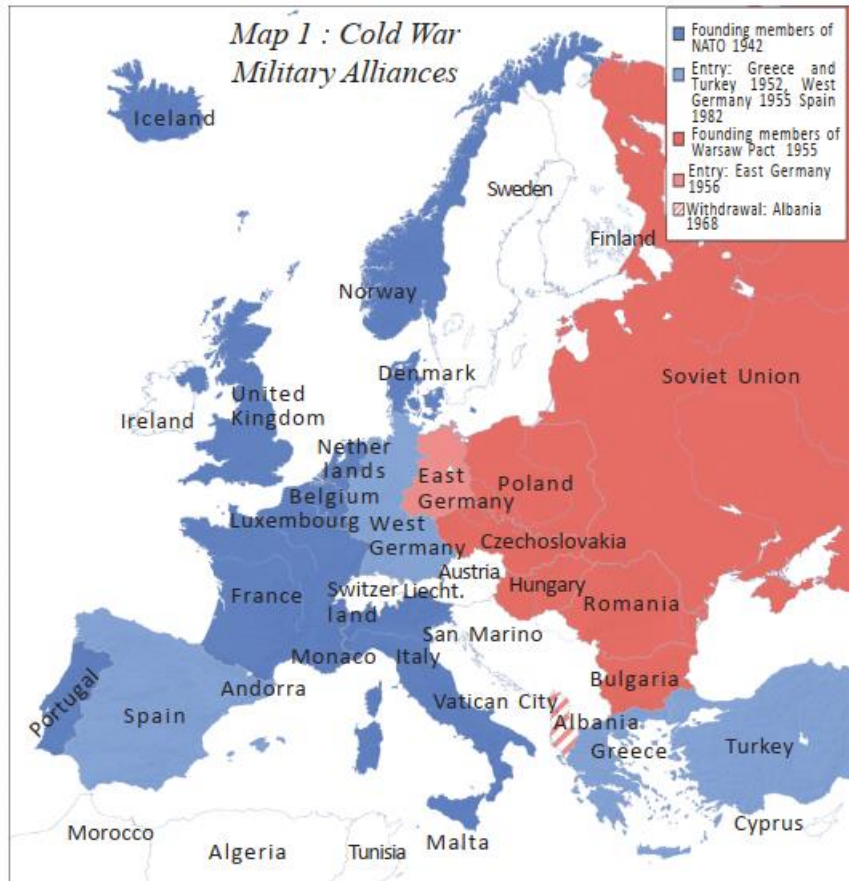
5. Read the following map and answer the below questions.



- a) This map shows which aspect?
- b) Before state reorganization which is not part in Andhra Pradesh?

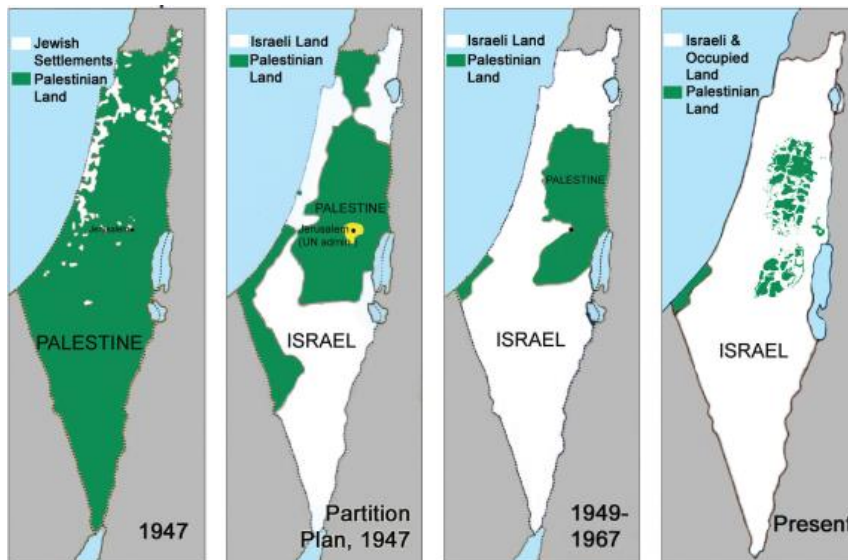
Map 1 : A graphic representation of various regions in the southern peninsula before State reorganisation.

6. Read the following map and answer the below questions.



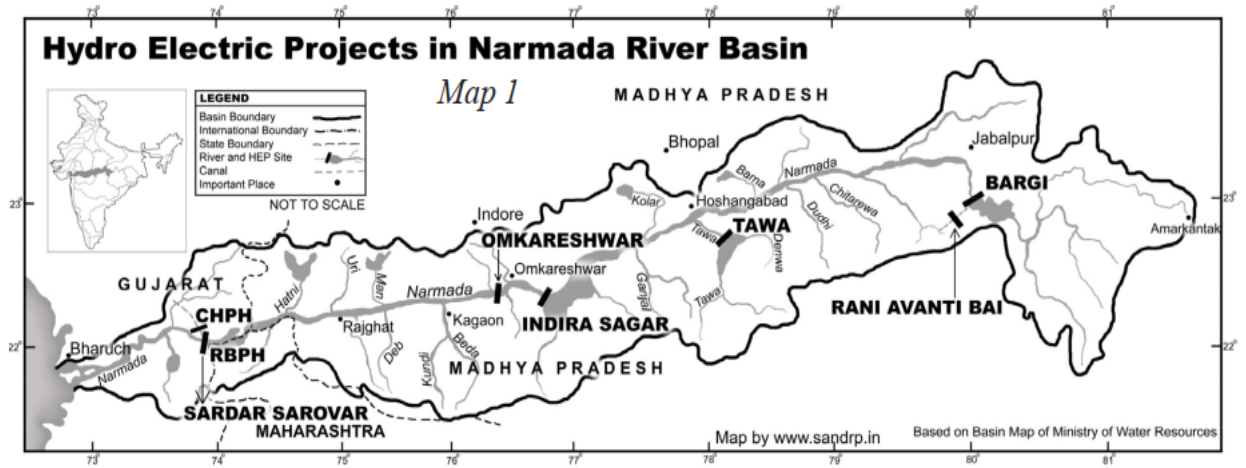
- a) Which country withdrawal From NATO in 1968?
- b) Which countries enter into NATO in 1952?

6. Read the following map and answer the below questions.



- a) This map shows which country loss its land gradually?
- b) Which is the separate state of Jews people?

8. Read the following map and answer the below questions.



- a) This map shows which aspect?
- b) Sardar sarovar dam located in which state?
- c) The origin place of River Narmada?

**Note:**

- This material for **Practice** only
- Please Use Our **DCEB Study Material, Vizianagaram** for Key

[www.digitalsocialteacher.in](http://www.digitalsocialteacher.in)

Prepared by

*Rambabu Sunkari*