

SSC PUBLIC EXAMINATIONS: JULY-2020

SOCIAL STUDIES - PAPER - I & II

MODEL PAPER-I

(English Medium)

Time: 3.15 Hrs.

Max. Marks: 100 Marks

Instructions:

1. 15 Minutes are allotted for reading the question paper in addition to 3.00 hours for writing the answers.
2. All answers should be written in the separate answer booklet.
3. There are four sections in the question paper.
4. There is internal choice in Section-IV.

SECTION -I

Note: 1. If any question is answered more than once in this section, the earlier answer will only be considered.

2. Answer all the questions.

3. Each question carries 1 Mark.

12 x 1 = 12 M

1. Find the correct statement

- A. The Indo-Gangetic plain divided into 3 parts
B. Western part is responsible of Ganga and its tributaries
- A only
 - B only
 - C Both A&B

2. Expand GDP

3. Which sector continues to be the largest employer till now?

4. Based on the relations between the information in the first pair and complete the second pair.

Climate: Long period

Weather: ?

5. Identify the wrongly matched pair and write it in the answer booklet

River	Origin place
Krishna	Mahabaleswar in Western Ghats
Godavari	Nasik Triambak in Western Ghats
Narmada	Bhetul plateau

6. What is the highest peak in South India

TEACHER AND STUDENT PUBLICATIONS

POTTI SAMBASIVARAO. M.A.T.T.C

10TH CLASS STUDY MATERIAL EM & TM (With QR &

Online Exams in the books) (Books after School reopen)

SATTENAPALLI (PO) GUNTUR (DT)

(W) 9885678410 9440220410

7. What is the Name of the following Animal?



8. Consider the following paragraph and answer the given Question

'In this century Literacy levels and average life expectancy grew immensely New forms of art like movies emerged. The secrets of atom and life was discovered More than a hundred nations walked to independence and freedom across the world'

Q. The above are describing about which century?

9. Arrange the following in a chronological order:

- A. World war - 1 B. Cold war C. Great depression D. World war – 2

10. At the turn of the 20th century China was ruled by emperor's of _____ dynasty (Fill in the blanks)

11. Who gave the famous slogan Garibi Hatao?

12. Arrange the following countries from West to east?

- Britain Egypt China Australia

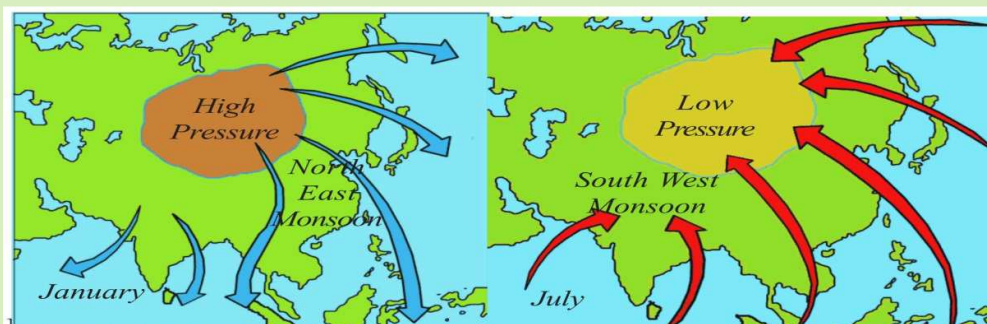
SECTION – II

Note : 1. Answer all the questions.

2. Each question carries 2 Marks.

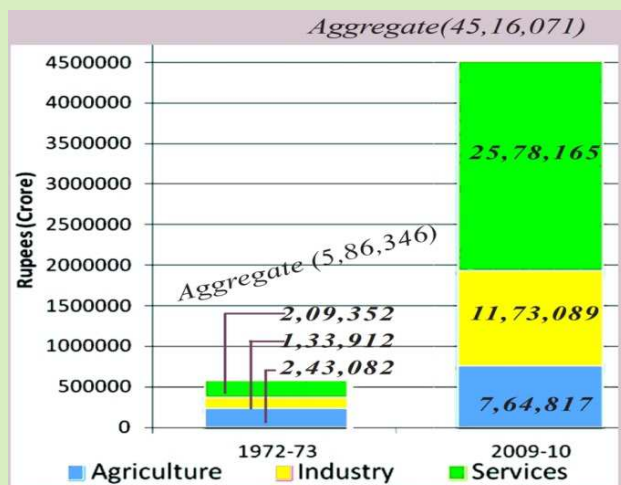
8 x 2 = 16

13. Read the following map and identify in which place Low pressure develops during North East Monsoon?



14. Define Sex ratio?

15. Now a days due to Lock down, the migrated labors are unable to find work and cannot go back to their native places unfortunately some are dying. What do you suggest to control Labor Migration?
16. What are the components in HDI?
17. What is the main theme in the Animal farm?
18. Write slogans to preserve peace in the world?
19. How did the election commission of India overcome the problem of illiteracy in first generalelection?
20. Read the following Graph of GDP and answer the given questions:



- 1) Approximately how many times the GDP increased from 1972-73 to 2009-10?
- 2) Which sector is more contributing to GDP in 2009-10?

TEACHER AND STUDENT PUBLICATIONS
POTTI SAMBASIVARAO. M.A.T.T.C
10TH CLASS STUDY MATERIAL EM & TM (With QR &
Online Exams in the Books (Books after School repon)
SATTENAPALLI (PO) GUNTUR (DT)
(W) 9885678410 9440220410

SECTION – III

Note : 1. Answer all the questions.

2. Each question carries 4 Marks.

8 x 4 = 32

21. Compare the similarities between the East coastal plains and Indo gangetic plains?
22. Why did the population of India increased after Independence ?
23. What are the causes for Global warming?
24. How did the organic farming reduce environmental stress? Explain
25. Observe the following map and answer the given questions?

Model paper prepared by

David Prakash Rayipudi M.A.,M.Ed.,

G U N T U R

TEACHER AND STUDENT PUBLICATIONS

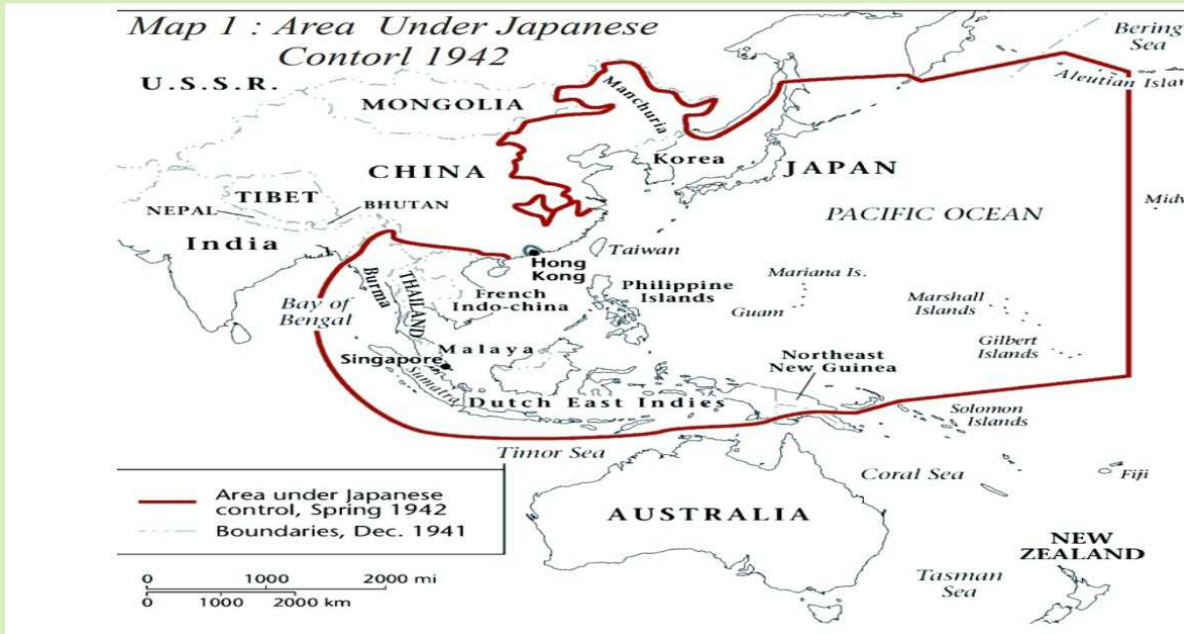
POTTI SAMBASIVARAO. M.A.T.T.C

10TH CLASS STUDY MATERIAL EM & TM(with QR &

Online Exams in the books) (Books after School reopen)

SATTENAPALLI (PO) GUNTUR (DT)

(W) 9885678410 9440220410



- 1) What is the present Name of Dutch East Indies?
- 2) Identify some countries which are not under the Japanese control?

26. How did emergency period is a set back to Indian Democracy?

27. Observe the following and answer the given questions:

Coalition Governments and some political parties from 1980's

Governing Parties	National Front 1989-1990	Governing Parties	United Front 1996-1998	Governing Parties	National Democratic Alliance 1998-2004	Governing Parties
JD; DMK; AGP; TDP ; Jammu & Kashmir National Conference (JKNC)		JKNC ; TDP; TMC; CPI; AGP; DMK; MGP; Samajwadi Party		JDU; SAD; AIADMK, JKNC; Trinamool Congress; Biju Janata Dal ; Shiva Sena ;		
Supporting Parties		Supporting Parties		Supporting Parties		Supporting Parties
CPM; CPI, BJP		CPM		TDP		
This is not a complete list of political parties that either supported for were part of the government. Often we have listed only those parties that had more 5 or MPs						

- 1) Which parties were supporting to National Front?
- 2) Give some examples to National parties?

28. Appreciate the role of INA in freedom movement of India?

SECTION – IV

Note : 1. Answer all the questions.

2. Each question carries 8 marks.

5 x 8 = 40

29. How did the Himalayas influence on Indian Agriculture and climate?

(OR)

Why the population increased after independence? Give some suggestions to control population growth?

30. "The schooling revolution played a crucial role for the human development in Himachal Pradesh" Comment

(OR)

"If the production of food grains increased the food security of the Nation also increased" write your Opinion

31. What are the impacts of wars on present Society?

(OR)

Now a days there is a trade war between the USA and China. Do you think The Cold wa restarted justify your answer?

32. Observe the following Timeline and answer the given questions:

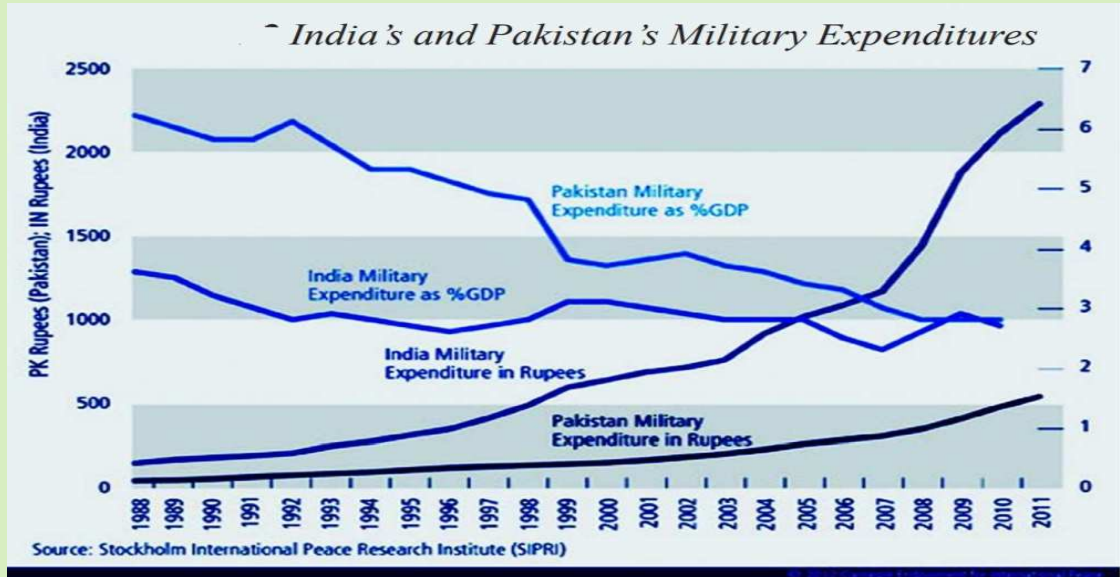


POTTI SAMBASIVARAO. M.A.T.T.C
10TH CLASS STUDY MATERIAL EM & TM (With QR &
Online Exams in the books) (Books after School reopen)
SATTENAPALLI (PO) GUNTUR (DT)
(W) 9885678410 9440220410

1. Which year Collectivisation began?
2. Who led the Bolsheviks revolution?
3. Which year bloody Sunday took place?
4. Who is the last king of Russia?

(OR)

B. observe the following graph and write your Analysis:



33. Mark the following on the outline map of **India**.

4M

- | | |
|---|----------------------------|
| a. 1. Second biggest Coast | b. 1. Most populous State |
| 2. The river which flowing through Pakistan | 2. The coral origin island |
| 3. Tamil Nadu | 3. Ladakh |
| 4. Mumbai | 4. Kerala |

Mark the following on the outline map of the **world**.

4M

- | | |
|--|-------------------------------|
| a. 1. The country defeated in Two world wars | b. 1. The Headquarters of UNO |
| 2. The country who fought against USA | 2. The Euro and Asian power |
| 3. South Africa | 3. Brazil |
| 4. China | 4. Vietna |

END

Model paper prepared by

TEACHER AND STUDENT PUBLICATIONS

POTTI SAMBASIVARAO. M.A.T.T.C

David Prakash Rayipudi M.A.,M.Ed.,

10TH CLASS STUDY MATERIAL EM & TM(with QR &

Online Exams in the books) (After School reopen)

G U N T U R

SATTENAPALLI (PO) GUNTUR (DT)

(W) 9885678410 9440220410

IMPORTANT INFORMATION

SECTION –I

(Q.Nos:1 to 6 –1st to 12th chapters And Q.Nos: 7 to 12- 13th to 22nd chapters)

SECTION -II

(Q.Nos:13 to 16 –1st to 12th chapters And Q.Nos: 17 to 20 – 13th to 22nd chapters)

SECTION -III

(Q.Nos:21 to 24 –1st to 12th chapters And Q.Nos:25 to 28 – 13th to 22nd chapters)

SECTION -IV

(Q.Nos:29 and 30 –1st to 12th chapters And Q.Nos:31and 32 – 13th to 22nd chapters)

Q.No:33 – Map- India/World

Model paper prepared by

David Prakash Rayipudi M.A.,M.Ed.,

G U N T U R

TEACHER AND STUDENT PUBLICATIONS

POTTI SAMBASIVARAO. M.A.T.T.C

10TH CLASS STUDY MATERIAL EM & TM(with QR &

Online Exams in the books) (Books after School reopen)

SATTENAPALLI (PO) GUNTUR (DT)

(W) 9885678410 9440220410